



GCSE

STATISTICS

F

Foundation Tier Paper 1

8382/1F

Diagram Booklet

[Turn over]

Table for use in answering Question 6

	NUMBER OF CARS	NUMBER OF LORRIES
MONDAY	5	17
TUESDAY	8	12
WEDNESDAY	12	17
THURSDAY	10	16
FRIDAY	7	16
SATURDAY	23	8
SUNDAY	19	10

Table for use in answering Question 7

YEAR	POPULATION (MILLIONS)
1980	120
1990	150
2000	175
2010	195
2020	215

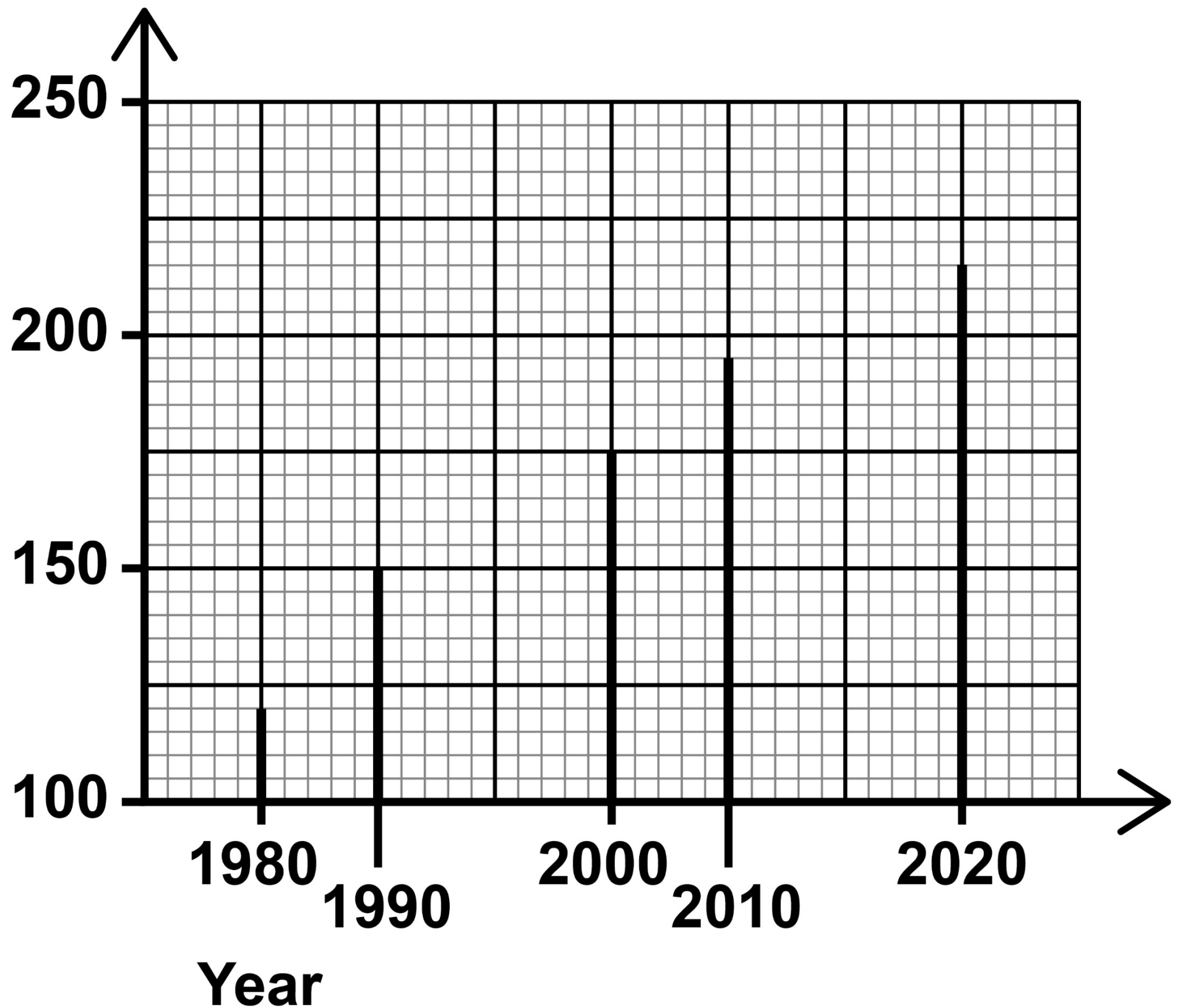
Source: populationpyramid.net

[Turn over]

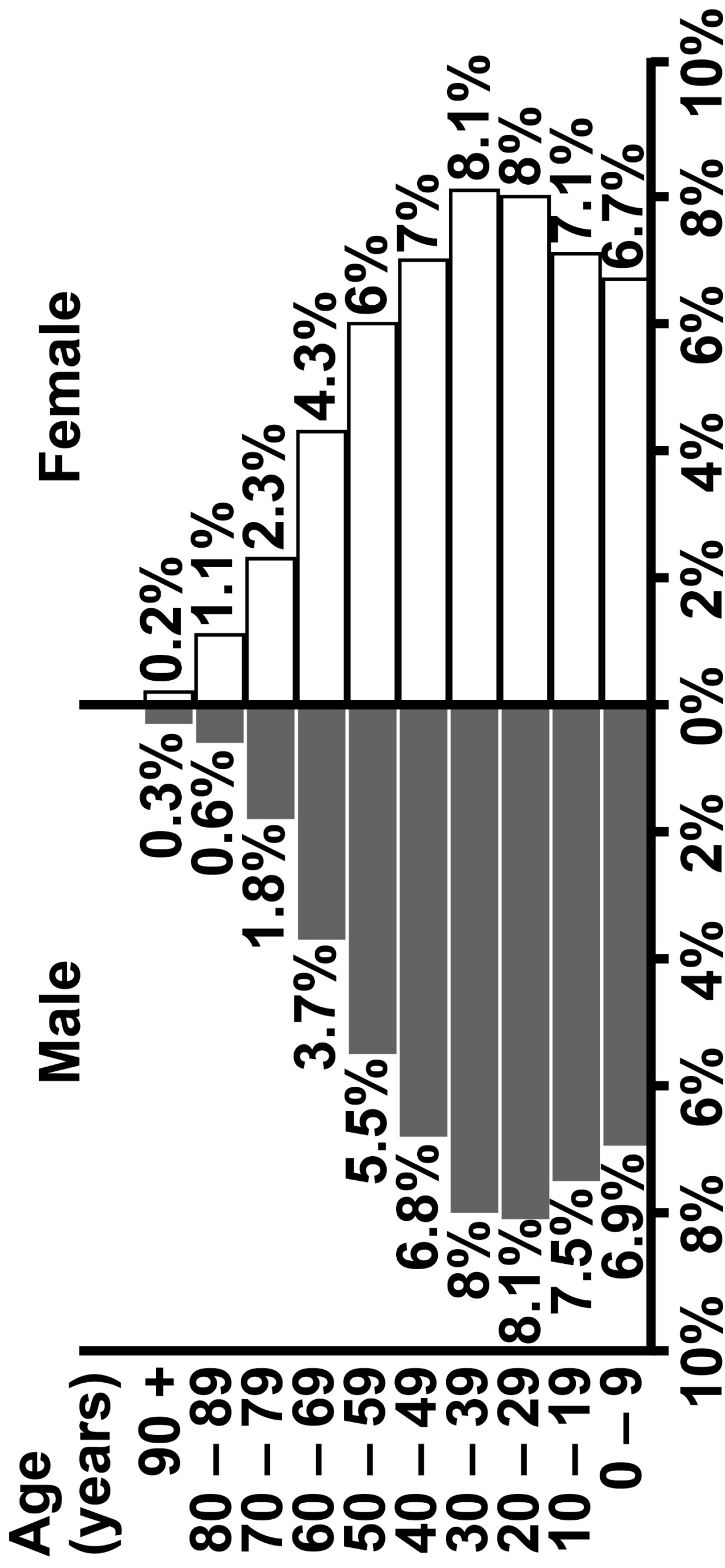
Line graph for use in answering 7(c)(i)
and 7(c)(ii)

POPULATION OF BRAZIL

Population
(millions)



Population pyramid for use in answering Question 7(d)



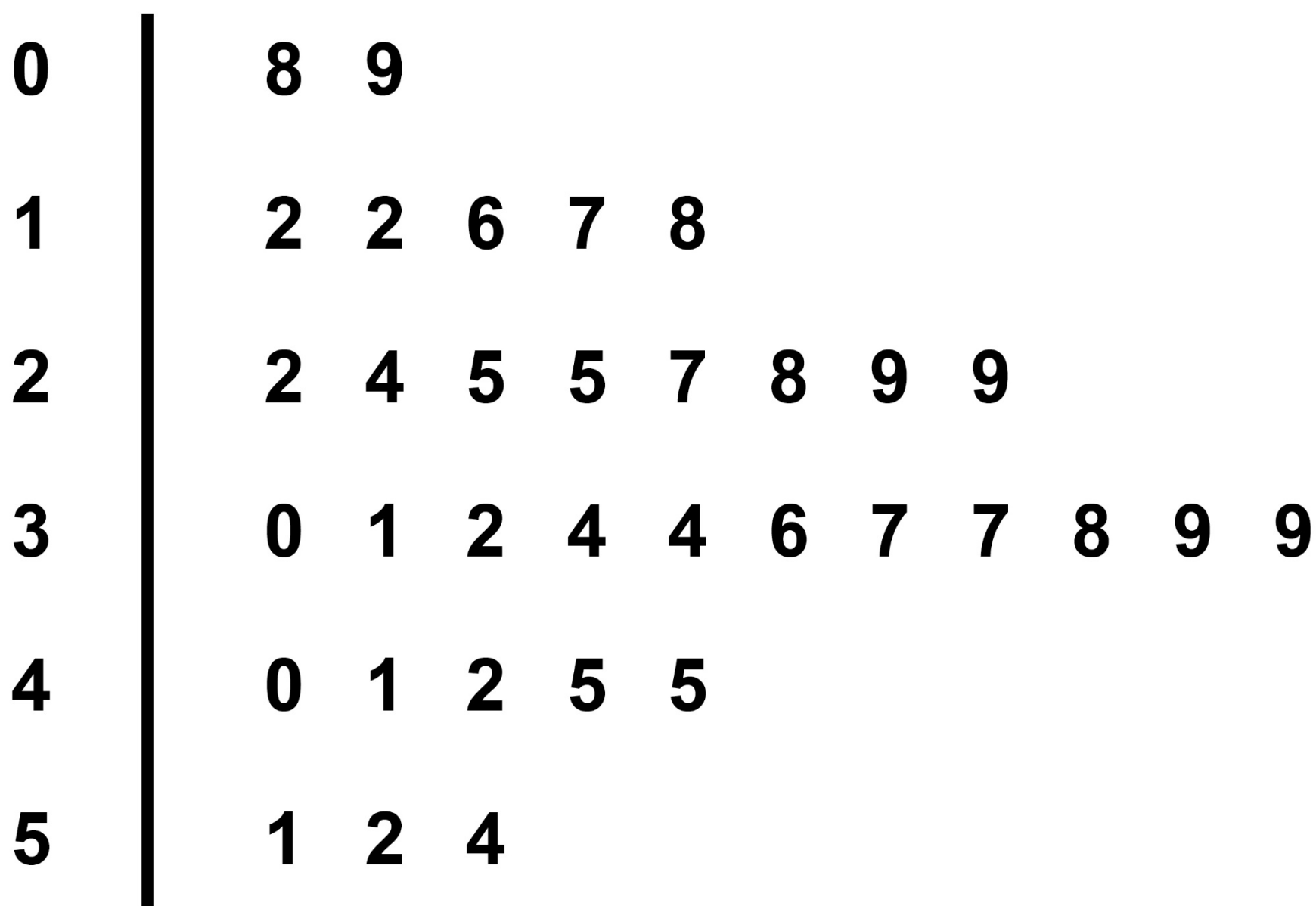
Source: Adapted from populationpyramid.net

[Turn over]

Table for use in answering Question 8(a)

Time, t (hours)	Frequency
$0 < t \leq 10$	2
$10 < t \leq 20$	12
$20 < t \leq 30$	9
$30 < t \leq 40$	7
$40 < t \leq 50$	3
$50 < t \leq 60$	1
	TOTAL = 34

Stem-and-leaf diagram for use in answering Question 8(b)



KEY: 1 | 2 = 12 hours

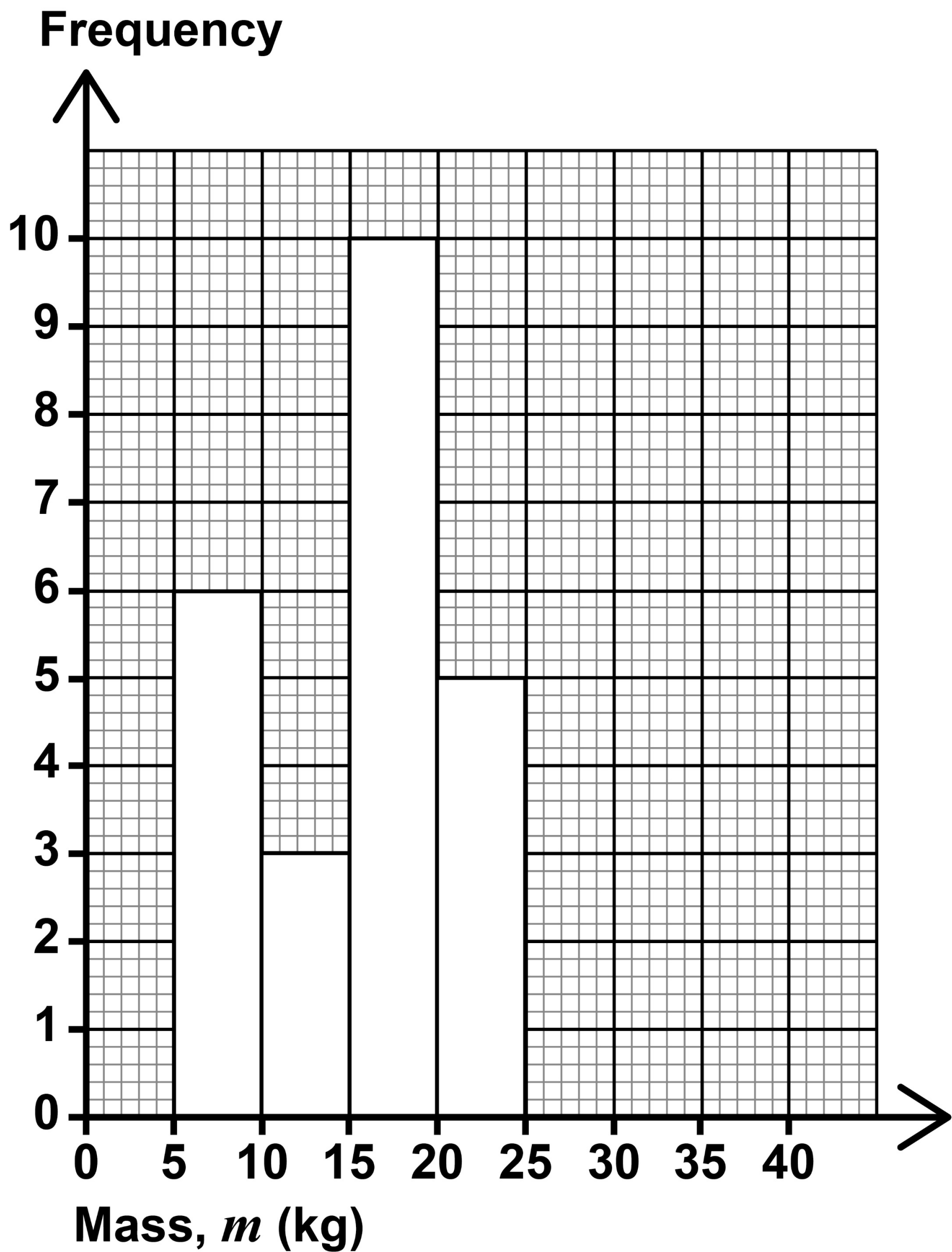
[Turn over]

Table for use in answering Question 10

YEAR	COST OF A 2ND CLASS STAMP	COST OF A 1ST CLASS STAMP
2000	19p	27p
2005	21p	30p
2010	32p	41p
2015	54p	63p
2020	65p	76p

Source: gbps.org.uk

Histogram for use in answering Question 11



END OF DIAGRAMS

BLANK PAGE

Copyright information

For confidentiality purposes, all acknowledgements of third-party copyright material are published in a separate booklet. This booklet is published after each live examination series and is available for free download from www.aqa.org.uk.

Permission to reproduce all copyright material has been applied for. In some cases, efforts to contact copyright-holders may have been unsuccessful and AQA will be happy to rectify any omissions of acknowledgements. If you have any queries please contact the Copyright Team.

Copyright © 2024 AQA and its licensors. All rights reserved.

WP/M/SB/Jun24/8382/1F/G4004/V3



2 4 6 G 8 3 8 2 / 1 F